




Numeracy Home Learning

Week Commencing: 18/5/2020



Numeracy Timetable

Day	Activity	Focus
Monday	1	Number
	2	Your Maths teacher has set you work on Mathletics. Log onto www.mathletics.co.uk Your username and password should be in the front of your planner. If you cannot find it, email your maths teacher (see email addresses at the end of the page)
Tuesday	1	Time
	2	Your Maths teacher has set you work on My Maths. Log onto www.mymaths.co.uk Your username and password should be in the front of your planner. If you cannot find it, email your maths teacher (see email addresses at the end of the page)
Wednesday	1	Money
	2	If you haven't already, join www.themathsfactor.com . This is a now a free website which has been setup by Carol Vorderman. Have fun exploring! Choose your own activities!
Thursday	1	Shape
	2	Visit www.topmarks.co.uk Have fun exploring! Choose your own activities!
Friday	1	Measure
	2	Your Maths teacher has set you work on Mathletics. Log onto www.mathletics.co.uk Your username and password should be in the front of your planner. If you cannot find it, email your maths teacher (see email addresses at the end of the page)

Your Maths Teachers Email Addresses:

Karen.packham@carwarden.surrey.sch.uk

Dean.biddle@carwarden.surrey.sch.uk

Carolyn.lamare@carwarden.surrey.sch.uk

Michelle.black@carwarden.surrey.sch.uk

Monday: Number – Calculate the correct answer

Question 1

What is the total of 2, 15 and 3?

20

19

25

15

Question 2

What is $8 + 9 + 7$?

26

25

23

24

Question 3

What is the total of 7 and 26?

34

43

23

33

Question 4

What is $10 + 9 + 10$?

11

39

19

29

Question 5

What is $10 + 27 + 10$?

45

37

47

54

Question 6

What is $23 + 45$?

75

68

65

57

Question 7

What is the total of 2, 15 and 3?

20

19

25

15

Question 8

What is $10 + 27 + 10$?

45

37

47

54

Question 9

What is 30 and 48 added together?

87

78

76

68

Question 10

What is $3 + 9 + 4$?

16

15

21

19

Tuesday: Time – Draw the hour and minute hands on each of the clocks to make the given times



half past six



one o'clock



five o'clock



half past four



half past three



ten o'clock



half past eleven



two o'clock



half past eight



nine o'clock



half past twelve



seven o'clock



half past four



eight o'clock



eleven o'clock



half past three



half past five



six o'clock



two o'clock



half past ten



nine o'clock



half past twelve



seven o'clock



half past one



twelve o'clock



half past eight



half past six



ten o'clock



nine o'clock



half past seven



two o'clock



half past one



five o'clock



half past four



half past eleven



three o'clock



half past nine



eleven o'clock



half past twelve



seven o'clock



ten o'clock



half past two



half past four



eight o'clock



five o'clock



half past six



half past one



three o'clock

Wednesday: Money – count how much money you have -
each coin is a 10p

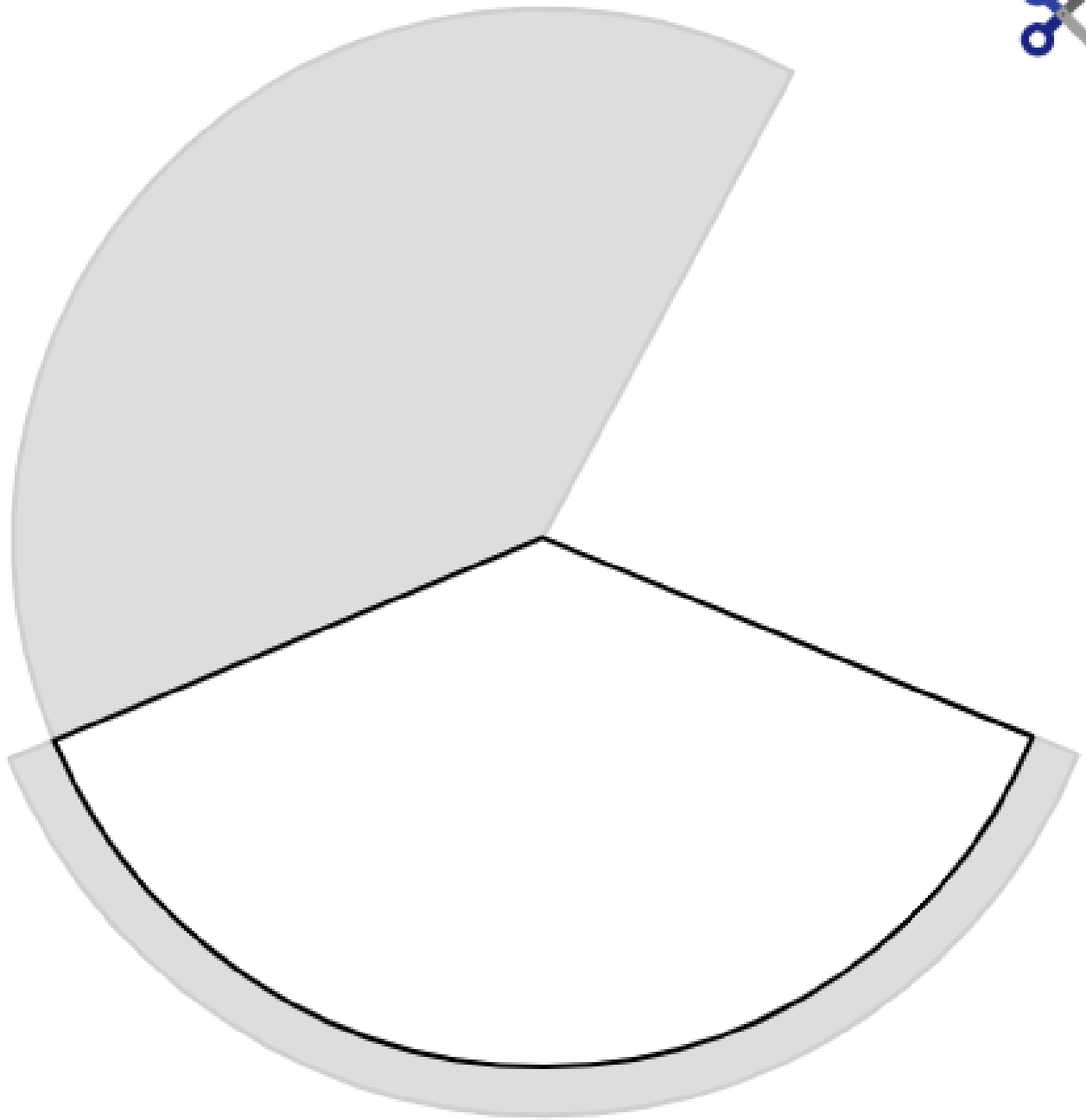











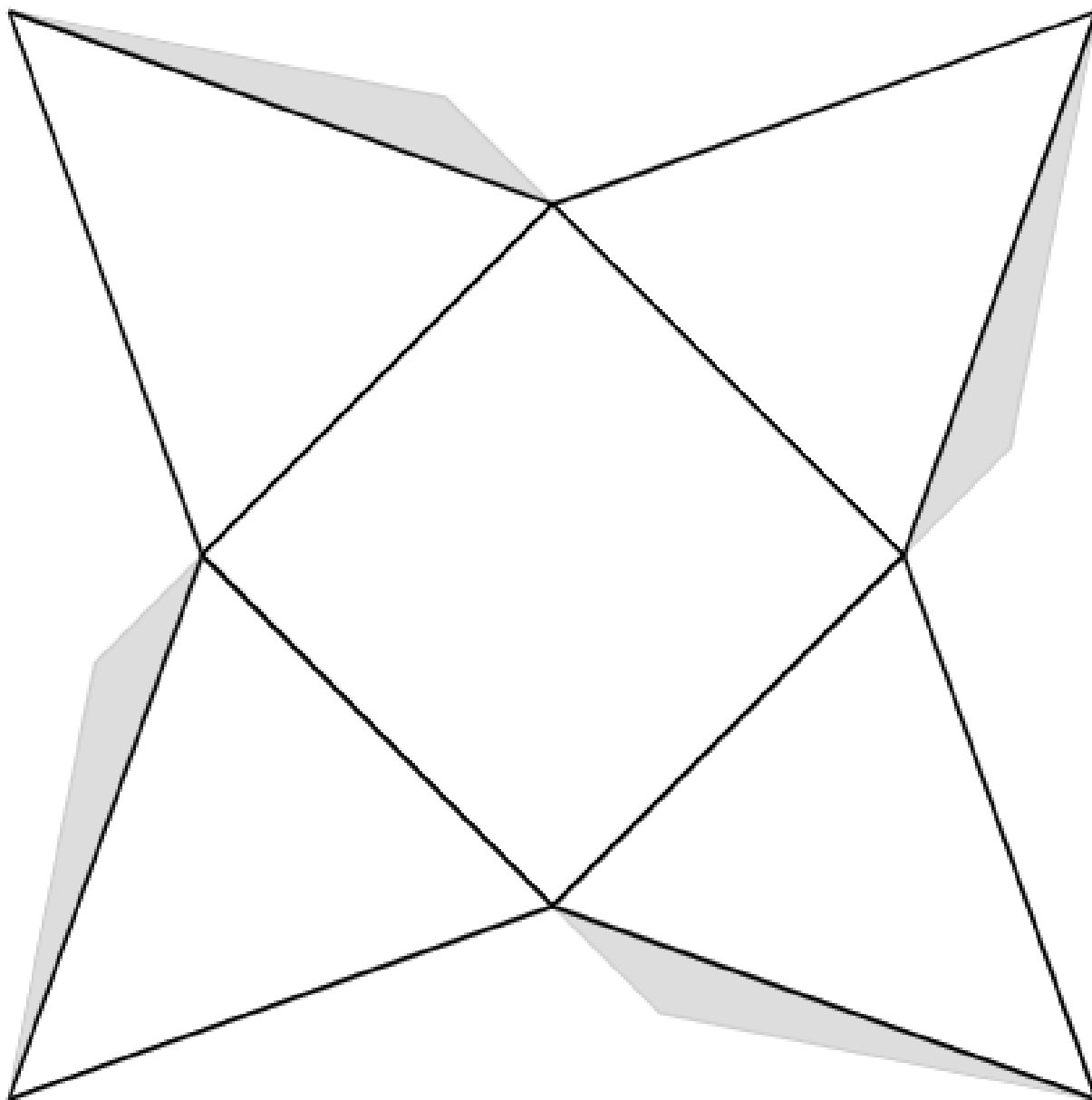
Thursday: Shape – cut out the nets of these 3D shapes.
Can you guess the name of the 3d shape you will make?



Don't cut off the shaded area – you will need it to stick your shape together!



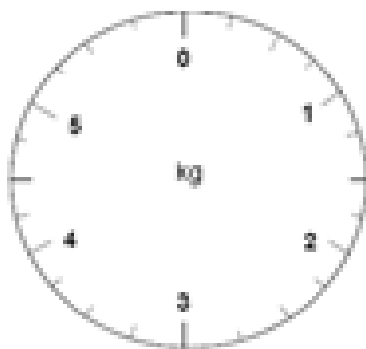
Don't cut off the shaded area – you will need it to stick your shape together!



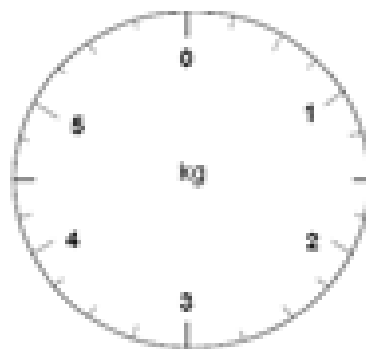
Don't cut off the shaded area – you will need it to stick your shape together!

Friday: Measure

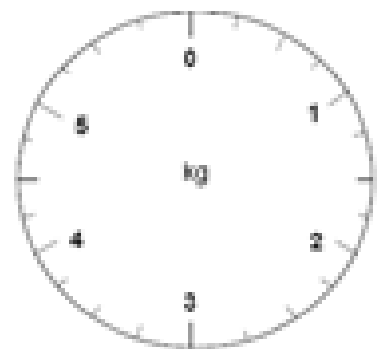
Draw the pointer on the scale to show the weight below.



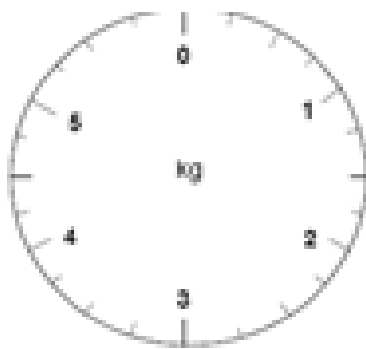
2kg



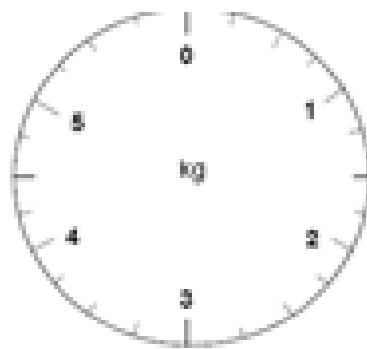
5kg



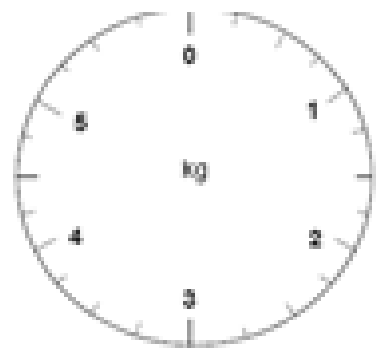
1kg



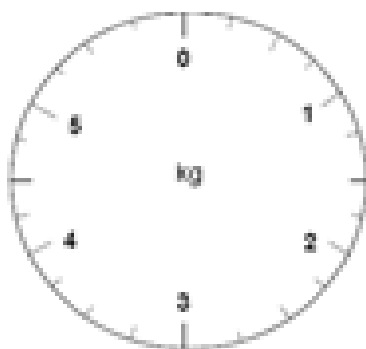
4kg



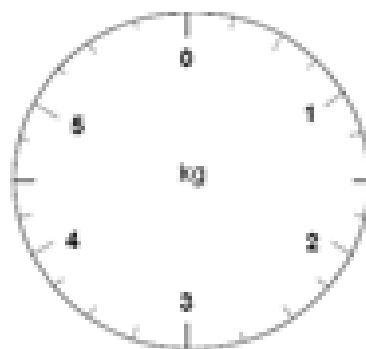
0kg



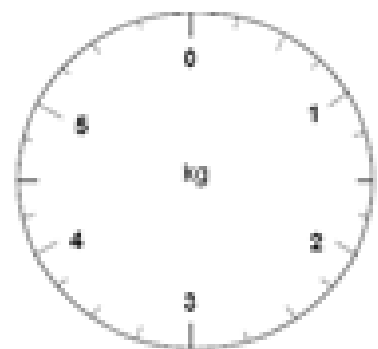
3kg



$2\frac{1}{2}$ kg

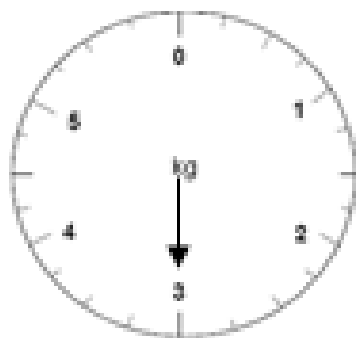


$3\frac{1}{2}$ kg

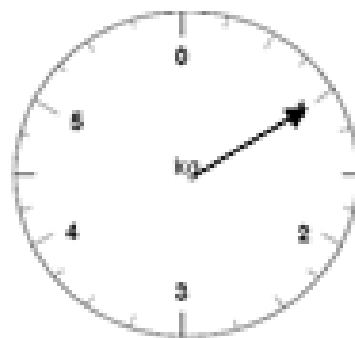


$4\frac{1}{2}$ kg

Write the weights under the scales.




___ kg



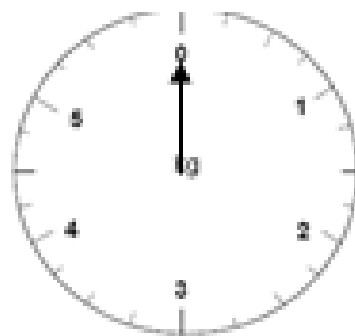
___ kg



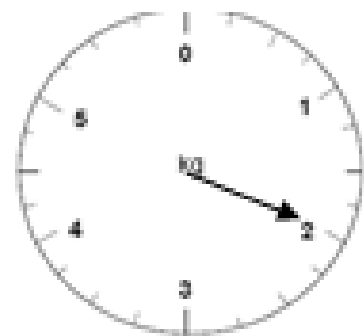
___ kg



___ kg



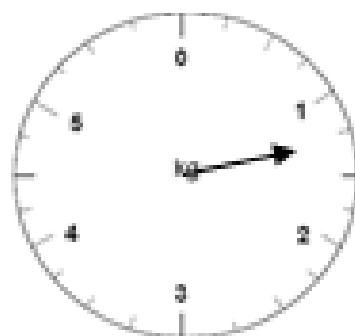
___ kg



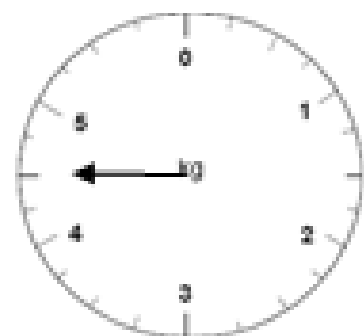
___ kg



___ kg



___ kg



___ kg

Challenge: Can you find some items in your house that weigh more than 1kg? Write them below.