




## Numeracy Home Learning

Week Commencing: 20/7/2020



## Numeracy Timetable

Day	Activity	Focus
Monday	1	Number
	2	Your Maths teacher has set you work on Mathletics. Log onto <a href="http://www.mathletics.co.uk">www.mathletics.co.uk</a> Your username and password should be in the front of your planner. If you cannot find it, email your maths teacher (see email addresses at the end of the page)
Tuesday	1	Time
	2	Your Maths teacher has set you work on My Maths. Log onto <a href="http://www.mymaths.co.uk">www.mymaths.co.uk</a> Your username and password should be in the front of your planner. If you cannot find it, email your maths teacher (see email addresses at the end of the page)
Wednesday	1	Money
	2	If you haven't already, join <a href="http://www.themathsfactor.com">www.themathsfactor.com</a> . This is a now a free website which has been setup by Carol Vorderman. Have fun exploring! Choose your own activities!

Your Maths Teachers Email Addresses:

[Karen.packham@carwarden.surrey.sch.uk](mailto:Karen.packham@carwarden.surrey.sch.uk)


[Dean.biddle@carwarden.surrey.sch.uk](mailto:Dean.biddle@carwarden.surrey.sch.uk)

[Carolyn.lamare@carwarden.surrey.sch.uk](mailto:Carolyn.lamare@carwarden.surrey.sch.uk)

[Michelle.black@carwarden.surrey.sch.uk](mailto:Michelle.black@carwarden.surrey.sch.uk)

# Monday: Number

Can you colour the  
odd numbers in **green** and the even numbers in **yellow**?

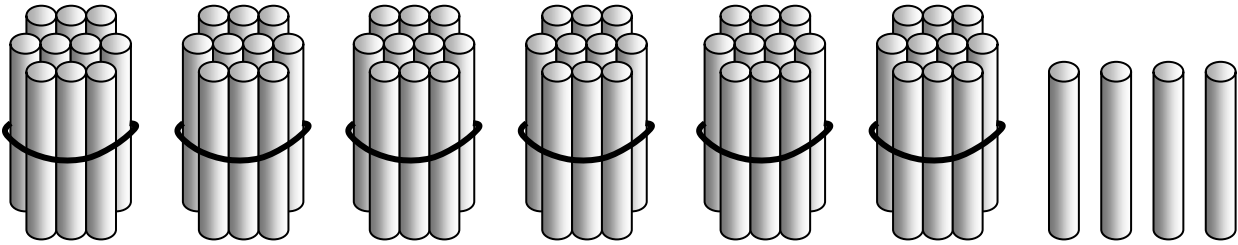


Can you put the numbers in order from smallest to biggest?

<b>Odd</b>							
<b>Even</b>							

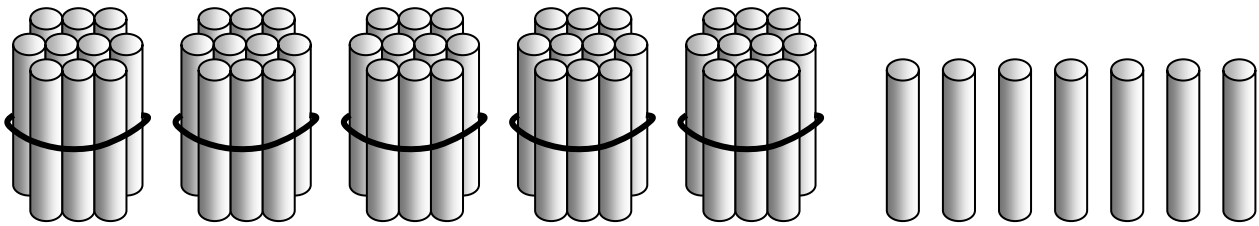
What number am I?

- How many bundles of ten?
- How many ones?
- What number am I?



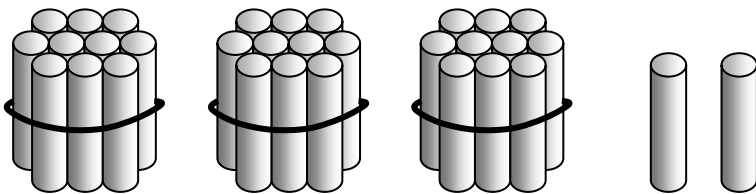
tens	ones

My Number



tens	ones

My Number



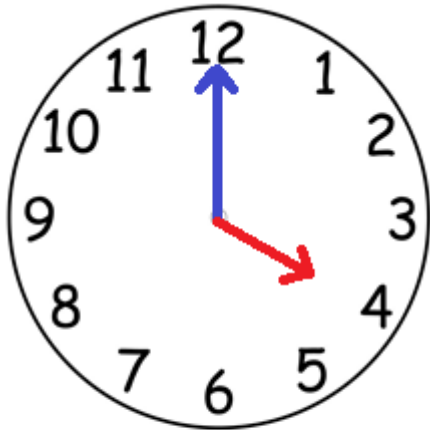
tens	ones

My Number

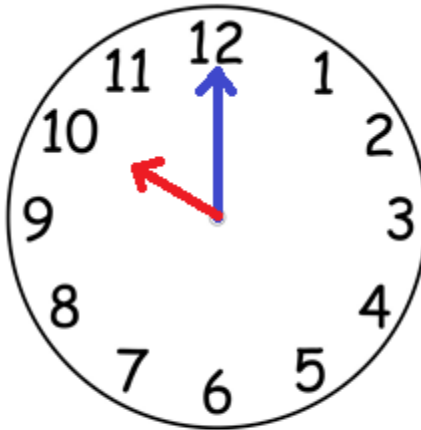
Tuesday: Time



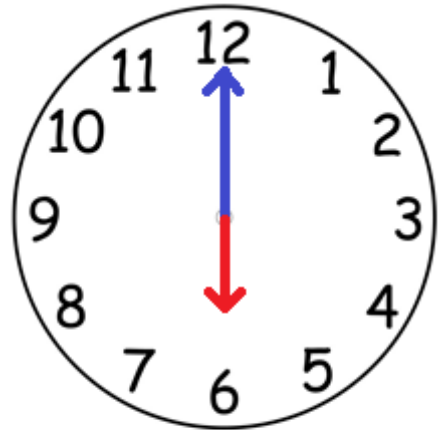
# What's the time Mr Wolf?



o'clock




o'clock




o'clock


Draw the hands on the clock to show the time.



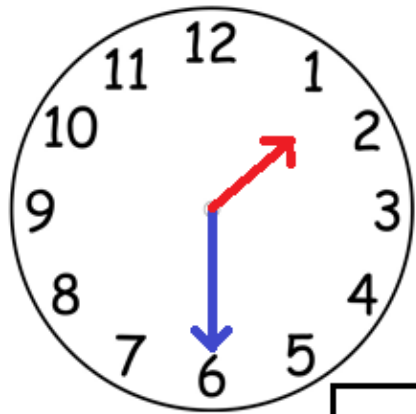
Half past 1



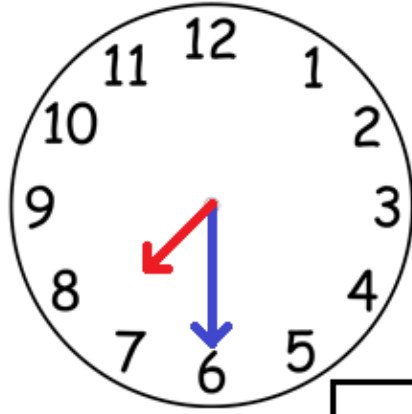
Half past 8



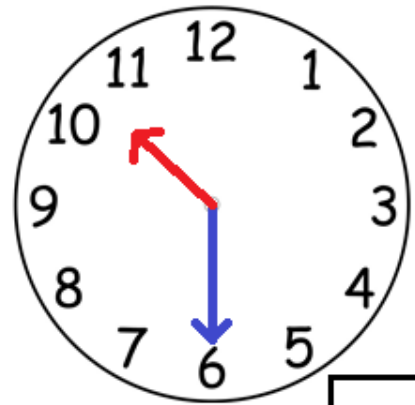
Half past 11



Half past



Half past



Half past

Can you draw the hands on the clocks to show the time?



Quarter to 4



Quarter past 6



Quarter to 10



Write here



Write here



Write here

## Wednesday: Money

For each of the following shopping lists you need to add up the total cost of all the items. You then need to work out how much change they would get.

	£
Pasta	0.10
Mince	1.01
Tin of Tuna	0.20
Lemon Squash	1.10
Bacon	1.00
Sweets	0.43
Chocolate	1.05

Total due \_\_\_\_\_

Cash                      £5.00

Change                      \_\_\_\_\_

	£
Tin foil	1.01
Eggs	0.41
Bread	0.10
Lemonade	1.00
Ketchup	0.31
Sunflower oil	0.10
Chicken	1.00

Total due \_\_\_\_\_

Cash                      £5.00

Change                      \_\_\_\_\_

Use this space to show how you worked it out.

**Challenge:** What coins would you use to give the change?